

NTA JEE 7th to 9th Jan 2020

Application No.	
Candidate Name	
Roll No.	
Test Date	09/01/2020
Test Time	9:30 AM - 12:30 PM
Subject	BTECH

Section : Physics

Q.1 An electric dipole of moment $\vec{p} = (-\hat{i} - 3\hat{j} + 2\hat{k}) \times 10^{-29}$ C.m is at the origin (0, 0, 0). The electric field due to this dipole at $\vec{r} = +\hat{i} + 3\hat{j} + 5\hat{k}$ (note that $\vec{r} \cdot \vec{p} = 0$) is parallel to :

Options

1. $(+\hat{i} - 3\hat{j} - 2\hat{k})$
2. $(-\hat{i} - 3\hat{j} + 2\hat{k})$
3. $(+\hat{i} + 3\hat{j} - 2\hat{k})$
4. $(-\hat{i} + 3\hat{j} - 2\hat{k})$

Question Type : MCQ

Question ID : 4050361929

Option 1 ID : 4050366939

Option 2 ID : 4050366936

Option 3 ID : 4050366937

Option 4 ID : 4050366938

Status : Answered

Chosen Option : 3

Q.2 Consider two ideal diatomic gases A and B at some temperature T . Molecules of the gas A are rigid, and have a mass m . Molecules of the gas B have an additional vibrational mode, and have a mass $\frac{m}{4}$. The ratio of the specific heats (C_V^A and C_V^B) of gas A and B, respectively is :

- Options
1. 5 : 9
 2. 7 : 9
 3. 3 : 5
 4. 5 : 7

Question Type : **MCQ**

Question ID : **4050361926**

Option 1 ID : **4050366927**

Option 2 ID : **4050366926**

Option 3 ID : **4050366924**

Option 4 ID : **4050366925**

Status : **Answered**

Chosen Option : **4**

Q.3 Two particles of equal mass m have respective initial velocities $u\hat{i}$ and $u\left(\frac{\hat{i} + \hat{j}}{2}\right)$. They collide completely inelastically. The energy lost in the process is :

- Options
1. $\frac{3}{4} mu^2$
 2. $\sqrt{\frac{2}{3}} mu^2$
 3. $\frac{1}{3} mu^2$
 4. $\frac{1}{8} mu^2$

Question Type : **MCQ**

Question ID : **4050361921**

Option 1 ID : **4050366905**

Option 2 ID : **4050366906**

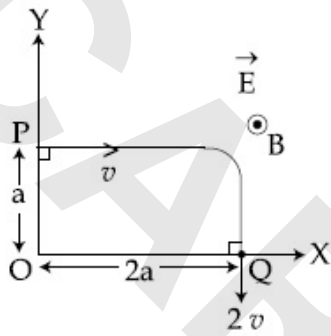
Option 3 ID : **4050366907**

Option 4 ID : **4050366904**

Status : **Answered**

Chosen Option : **4**

- Q.4 A charged particle of mass 'm' and charge 'q' moving under the influence of uniform electric field $\vec{E} = E\hat{i}$ and a uniform magnetic field $\vec{B} = B\hat{k}$ follows a trajectory from point P to Q as shown in figure. The velocities at P and Q are respectively, $v\hat{i}$ and $-2v\hat{j}$. Then which of the following statements (A, B, C, D) are the correct? (Trajectory shown is schematic and not to scale)



- (A) $E = \frac{3}{4} \left(\frac{mv^2}{qa} \right)$
- (B) Rate of work done by the electric field at P is $\frac{3}{4} \left(\frac{mv^3}{a} \right)$
- (C) Rate of work done by both the fields at Q is zero
- (D) The difference between the magnitude of angular momentum of the particle at P and Q is $2\text{ } mav$.

- Options
1. (A), (C), (D)
 2. (A), (B), (C)
 3. (A), (B), (C), (D)
 4. (B), (C), (D)

Question Type : MCQ

Question ID : 4050361931

Option 1 ID : 4050366946

Option 2 ID : 4050366947

Option 3 ID : 4050366944

Option 4 ID : 4050366945

Status : Answered

Chosen Option : 3

Q.5 A particle moving with kinetic energy E has de Broglie wavelength λ . If energy ΔE is added to its energy, the wavelength become $\lambda/2$. Value of ΔE , is :

- Options
1. $2E$
 2. $4E$
 3. $3E$
 4. E

Question Type : **MCQ**

Question ID : **4050361935**

Option 1 ID : **4050366961**

Option 2 ID : **4050366963**

Option 3 ID : **4050366962**

Option 4 ID : **4050366960**

Status : **Answered**

Chosen Option : **3**

Q.6 A vessel of depth $2h$ is half filled with a liquid of refractive index $2\sqrt{2}$ and the upper half with another liquid of refractive index $\sqrt{2}$. The liquids are immiscible. The apparent depth of the inner surface of the bottom of vessel will be :

- Options
1. $\frac{h}{\sqrt{2}}$
 2. $\frac{3}{4} h\sqrt{2}$
 3. $\frac{h}{3\sqrt{2}}$
 4. $\frac{h}{2(\sqrt{2} + 1)}$

Question Type : **MCQ**

Question ID : **4050361933**

Option 1 ID : **4050366952**

Option 2 ID : **4050366953**

Option 3 ID : **4050366955**

Option 4 ID : **4050366954**

Status : **Answered**

Chosen Option : **2**

Q.7

Radiation, with wavelength 6561 \AA falls on a metal surface to produce photoelectrons. The electrons are made to enter a uniform magnetic field of $3 \times 10^{-4} \text{ T}$. If the radius of the largest circular path followed by the electrons is 10 mm , the work function of the metal is close to :

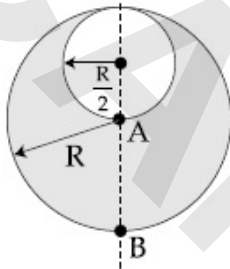
- Options
1. 0.8 eV
 2. 1.1 eV
 3. 1.8 eV
 4. 1.6 eV

Question Type : **MCQ**Question ID : **4050361936**Option 1 ID : **4050366964**Option 2 ID : **4050366965**Option 3 ID : **4050366967**Option 4 ID : **4050366966**Status : **Answered**Chosen Option : **2**

Q.8 Consider a sphere of radius R which carries a uniform charge density ρ . If a sphere of radius $\frac{R}{2}$ is carved out of it, as shown, the

ratio $\frac{|\vec{E}_A|}{|\vec{E}_B|}$ of magnitude of electric field

\vec{E}_A and \vec{E}_B , respectively, at points A and B due to the remaining portion is :



- Options
1. $\frac{21}{34}$
 2. $\frac{18}{54}$
 3. $\frac{17}{54}$
 4. $\frac{18}{34}$

Question Type : MCQ

Question ID : 4050361928

Option 1 ID : 4050366933

Option 2 ID : 4050366935

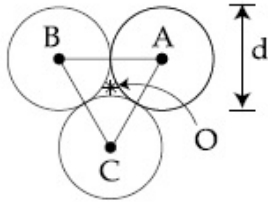
Option 3 ID : 4050366934

Option 4 ID : 4050366932

Status : Not Answered

Chosen Option : --

Q.9



Three solid spheres each of mass m and diameter d are stuck together such that the lines connecting the centres form an equilateral triangle of side of length d . The ratio I_0/I_A of moment of inertia I_0 of the system about an axis passing the centroid and about center of any of the spheres I_A and perpendicular to the plane of the triangle is :

Options

1. $\frac{15}{13}$
2. $\frac{13}{15}$
3. $\frac{13}{23}$
4. $\frac{23}{13}$

Question Type : MCQ

Question ID : 4050361922

Option 1 ID : 4050366911

Option 2 ID : 4050366909

Option 3 ID : 4050366908

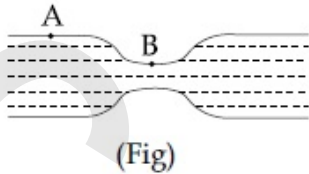
Option 4 ID : 4050366910

Status : Answered

Chosen Option : 3

Q.10 Water flows in a horizontal tube (see figure). The pressure of water changes by 700 Nm^{-2} between A and B where the area of cross section are 40 cm^2 and 20 cm^2 , respectively. Find the rate of flow of water through the tube.

(density of water = 1000 kgm^{-3})



- Options**
1. $3020 \text{ cm}^3/\text{s}$
 2. $2420 \text{ cm}^3/\text{s}$
 3. $2720 \text{ cm}^3/\text{s}$
 4. $1810 \text{ cm}^3/\text{s}$

Question Type : **MCQ**

Question ID : **4050361924**

Option 1 ID : **4050366919**

Option 2 ID : **4050366917**

Option 3 ID : **4050366918**

Option 4 ID : **4050366916**

Status : **Answered**

Chosen Option : **3**

Q.11 Three harmonic waves having equal frequency ν and same intensity I_0 , have

phase angles 0 , $\frac{\pi}{4}$ and $-\frac{\pi}{4}$ respectively.

When they are superimposed the intensity of the resultant wave is close to :

- Options**
1. $0.2 I_0$
 2. I_0
 3. $3 I_0$
 4. $5.8 I_0$

Question Type : **MCQ**

Question ID : **4050361927**

Option 1 ID : **4050366929**

Option 2 ID : **4050366928**

Option 3 ID : **4050366930**

Option 4 ID : **4050366931**

Status : **Answered**

Chosen Option : **4**

Q.12 The aperture diameter of a telescope is 5 m. The separation between the moon and the earth is 4×10^5 km. With light of wavelength of 5500 \AA , the minimum separation between objects on the surface of moon, so that they are just resolved, is close to :

- Options
1. 600 m
 2. 20 m
 3. 60 m
 4. 200 m

Question Type : **MCQ**

Question ID : **4050361934**

Option 1 ID : **4050366959**

Option 2 ID : **4050366956**

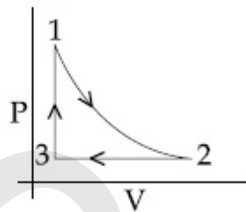
Option 3 ID : **4050366957**

Option 4 ID : **4050366958**

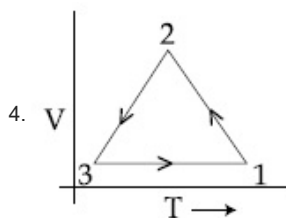
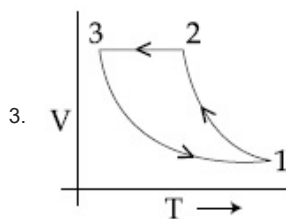
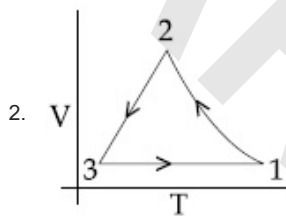
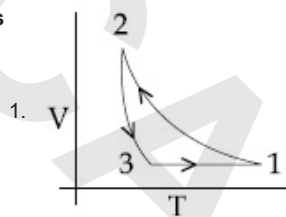
Status : **Answered**

Chosen Option : **4**

- Q.13** Which of the following is an equivalent cyclic process corresponding to the thermodynamic cyclic given in the figure? where, $1 \rightarrow 2$ is adiabatic.
(Graphs are schematic and are not to scale)



Options



Question Type : MCQ

Question ID : 4050361925

Option 1 ID : 4050366921

Option 2 ID : 4050366920

Option 3 ID : 4050366922

Option 4 ID : 4050366923

Status : Answered

Chosen Option : 2

Q.14 The electric fields of two plane electromagnetic plane waves in vacuum are given by

$$\vec{E}_1 = E_0 \hat{j} \cos(\omega t - kx) \text{ and}$$

$$\vec{E}_2 = E_0 \hat{k} \cos(\omega t - ky)$$

At $t=0$, a particle of charge q is at origin

with a velocity $\vec{v} = 0.8c \hat{j}$ (c is the speed of light in vacuum). The instantaneous force experienced by the particle is :

Options

1. $E_0 q (0.8 \hat{i} - \hat{j} + 0.4 \hat{k})$

2. $E_0 q (0.4 \hat{i} - 3 \hat{j} + 0.8 \hat{k})$

3. $E_0 q (-0.8 \hat{i} + \hat{j} + \hat{k})$

4. $E_0 q (0.8 \hat{i} + \hat{j} + 0.2 \hat{k})$

Question Type : MCQ

Question ID : 4050361932

Option 1 ID : 4050366951

Option 2 ID : 4050366950

Option 3 ID : 4050366948

Option 4 ID : 4050366949

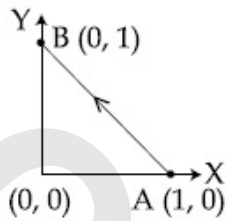
Status : Answered

Chosen Option : 3

Q.15

Consider a force $\vec{F} = -x\hat{i} + y\hat{j}$. The work done by this force in moving a particle from point A(1, 0) to B(0, 1) along the line segment is :

(all quantities are in SI units)



Options

1. $\frac{3}{2}$
2. 2
3. 1
4. $\frac{1}{2}$

Question Type : MCQ

Question ID : 4050361920

Option 1 ID : 4050366901

Option 2 ID : 4050366903

Option 3 ID : 4050366902

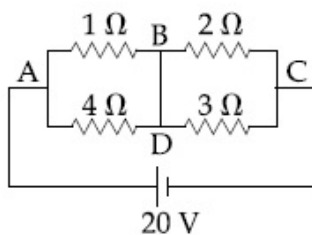
Option 4 ID : 4050366900

Status : Answered

Chosen Option : 3

Q.16

In the given circuit diagram, a wire is joining points B and D. The current in this wire is :



Options 1. 0.4A

2. zero
3. 2A
4. 4A

Question Type : MCQ

Question ID : 4050361938

Option 1 ID : 4050366975

Option 2 ID : 4050366972

Option 3 ID : 4050366973

Option 4 ID : 4050366974

Status : Answered

Chosen Option : 4

Q.17 A long, straight wire of radius a carries a current distributed uniformly over its cross-section. The ratio of the magnetic fields due to the wire at distance $\frac{a}{3}$ and $2a$, respectively from the axis of the wire is :

- Options**
1. $\frac{3}{2}$
 2. 2
 3. $\frac{2}{3}$
 4. $\frac{1}{2}$

Question Type : **MCQ**

Question ID : **4050361930**

Option 1 ID : **4050366943**

Option 2 ID : **4050366941**

Option 3 ID : **4050366942**

Option 4 ID : **4050366940**

Status : **Answered**

Chosen Option : **1**

Q.18

A quantity f is given by $f = \sqrt{\frac{hc^5}{G}}$ where

c is speed of light, G universal gravitational constant and h is the Planck's constant.

Dimension of f is that of :

- Options**
1. area
 2. volume
 3. momentum
 4. energy

Question Type : **MCQ**

Question ID : **4050361919**

Option 1 ID : **4050366898**

Option 2 ID : **4050366896**

Option 3 ID : **4050366897**

Option 4 ID : **4050366899**

Status : **Answered**

Chosen Option : **4**

Q.19 If the screw on a screw-gauge is given six rotations, it moves by 3 mm on the main scale. If there are 50 divisions on the circular scale the least count of the screw gauge is :

- Options**
1. 0.001 cm
 2. 0.01 cm
 3. 0.02 mm
 4. 0.001 mm

Question Type : **MCQ**

Question ID : **4050361937**

Option 1 ID : **4050366970**

Option 2 ID : **4050366968**

Option 3 ID : **4050366969**

Option 4 ID : **4050366971**

Status : **Answered**

Chosen Option : **1**

Q.20 A body A of mass m is moving in a circular orbit of radius R about a planet. Another body B of mass $\frac{m}{2}$ collides with A with a

velocity which is half $\left(\frac{\vec{v}}{2}\right)$ the

instantaneous velocity \vec{v} of A. The collision is completely inelastic. Then, the combined body :

- Options**
1. Escapes from the Planet's Gravitational field
 2. starts moving in an elliptical orbit around the planet
 3. Falls vertically downwards towards the planet
 4. continues to move in a circular orbit

Question Type : **MCQ**

Question ID : **4050361923**

Option 1 ID : **4050366912**

Option 2 ID : **4050366915**

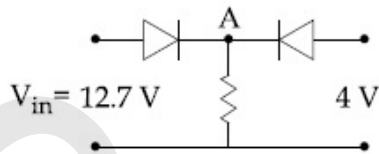
Option 3 ID : **4050366913**

Option 4 ID : **4050366914**

Status : **Answered**

Chosen Option : **3**

- Q.21** Both the diodes used in the circuit shown are assumed to be ideal and have negligible resistance when these are forward biased. Built in potential in each diode is 0.7 V. For the input voltages shown in the figure, the voltage (in Volts) at point A is _____.



Given 8.4
Answer :

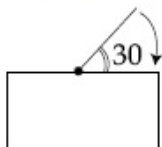
Question Type : SA
Question ID : 4050361943
Status : Answered

- Q.22** The distance x covered by a particle in one dimensional motion varies with time t as $x^2 = at^2 + 2bt + c$. If the acceleration of the particle depends on x as x^{-n} , where n is an integer, the value of n is _____.

Given --
Answer :

Question Type : SA
Question ID : 4050361939
Status : Not Answered

- Q.23** One end of a straight uniform 1 m long bar is pivoted on horizontal table. It is released from rest when it makes an angle 30° from the horizontal (see figure). Its angular speed when it hits the table is given as $\sqrt{n} \text{ s}^{-1}$, where n is an integer. The value of n is _____.



Given 10
Answer :

Question Type : SA
Question ID : 4050361940
Status : Answered

Q.24 A body of mass $m = 10 \text{ kg}$ is attached to one end of a wire of length 0.3 m . The maximum angular speed (in rad s^{-1}) with which it can be rotated about its other end in space station is (Breaking stress of wire $= 4.8 \times 10^7 \text{ Nm}^{-2}$ and area of cross-section of the wire $= 10^{-2} \text{ cm}^2$) is :

Given --
Answer :

Question Type : SA
Question ID : 4050361941
Status : Not Answered

Q.25 In a fluorescent lamp choke (a small transformer) 100 V of reverse voltage is produced when the choke current changes uniformly from 0.25 A to 0 in a duration of 0.025 ms . The self-inductance of the choke (in mH) is estimated to be _____.

Given 10
Answer :

Question Type : SA
Question ID : 4050361942
Status : Answered

Section : Chemistry

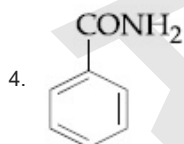
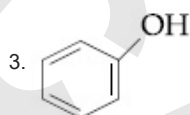
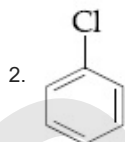
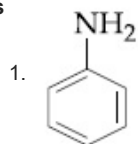
Q.1 If the magnetic moment of a dioxygen species is 1.73 B.M. , it may be :

- Options
1. O_2 , O_2^- or O_2^+
 2. O_2^- or O_2^+
 3. O_2 or O_2^-
 4. O_2 or O_2^+

Question Type : MCQ
Question ID : 4050361945
Option 1 ID : 4050366988
Option 2 ID : 4050366987
Option 3 ID : 4050366985
Option 4 ID : 4050366986
Status : Answered
Chosen Option : 1

Q.2 Which of these will produce the highest yield in Friedel Crafts reaction ?

Options



Question Type : **MCQ**

Question ID : **4050361957**

Option 1 ID : **4050367033**

Option 2 ID : **4050367036**

Option 3 ID : **4050367034**

Option 4 ID : **4050367035**

Status : **Marked For Review**

Chosen Option : **2**

Q.3 'X' melts at low temperature and is a bad conductor of electricity in both liquid and solid state. X is :

Options 1. Carbon tetrachloride

2. Silicon carbide

3. Mercury

4. Zinc sulphide

Question Type : **MCQ**

Question ID : **4050361949**

Option 1 ID : **4050367002**

Option 2 ID : **4050367003**

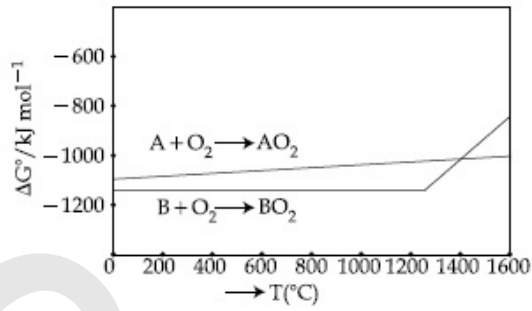
Option 3 ID : **4050367004**

Option 4 ID : **4050367001**

Status : **Answered**

Chosen Option : **1**

Q.4 According to the following diagram, A reduces BO_2 when the temperature is :



- Options
1. $> 1200\text{ }^\circ\text{C}$ but $< 1400\text{ }^\circ\text{C}$
 2. $> 1400\text{ }^\circ\text{C}$
 3. $< 1200\text{ }^\circ\text{C}$
 4. $< 1400\text{ }^\circ\text{C}$

Question Type : MCQ

Question ID : 4050361951

Option 1 ID : 4050367011

Option 2 ID : 4050367010

Option 3 ID : 4050367012

Option 4 ID : 4050367009

Status : Answered

Chosen Option : 2

Q.5 The de Broglie wavelength of an electron in the 4th Bohr orbit is :

- Options
1. $6\pi a_0$
 2. $2\pi a_0$
 3. $8\pi a_0$
 4. $4\pi a_0$

Question Type : MCQ

Question ID : 4050361944

Option 1 ID : 4050366983

Option 2 ID : 4050366984

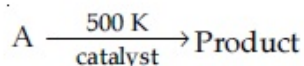
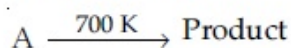
Option 3 ID : 4050366982

Option 4 ID : 4050366981

Status : Answered

Chosen Option : 3

Q.6 For following reactions



it was found that the E_a is decreased by 30 kJ/mol in the presence of catalyst. If the rate remains unchanged, the activation energy for catalysed reaction is (Assume pre exponential factor is same) :

- Options
1. 198 kJ/mol
 2. 105 kJ/mol
 3. 75 kJ/mol
 4. 135 kJ/mol

Question Type : MCQ

Question ID : 4050361947

Option 1 ID : 4050366996

Option 2 ID : 4050366993

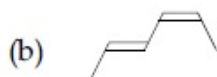
Option 3 ID : 4050366995

Option 4 ID : 4050366994

Status : Answered

Chosen Option : 2

Q.7 The correct order of heat of combustion for following alkadienes is :



- Options
1. (b) < (c) < (a)
 2. (a) < (b) < (c)
 3. (a) < (c) < (b)
 4. (c) < (b) < (a)

Question Type : MCQ

Question ID : 4050361962

Option 1 ID : 4050367054

Option 2 ID : 4050367056

Option 3 ID : 4050367055

Option 4 ID : 4050367053

Status : Answered

Chosen Option : 4

Q.8 Complex X of composition $\text{Cr}(\text{H}_2\text{O})_6\text{Cl}_n$ has a spin only magnetic moment of 3.83 BM. It reacts with AgNO_3 and shows geometrical isomerism. The IUPAC nomenclature of X is :

- Options
1. Tetraaquadichlorido chromium(IV) chloride dihydrate
 2. Hexaaqua chromium(III) chloride
 3. Dichloridotetraqua chromium(IV) chloride dihydrate
 4. Tetraaquadichlorido chromium(III) chloride dihydrate

Question Type : **MCQ**
Question ID : **4050361955**
Option 1 ID : **4050367026**
Option 2 ID : **4050367025**
Option 3 ID : **4050367028**
Option 4 ID : **4050367027**
Status : **Answered**
Chosen Option : **4**

Q.9 The electronic configurations of bivalent europium and trivalent cerium are :
(atomic number : Xe = 54, Ce = 58, Eu = 63)

- Options
1. $[\text{Xe}] 4f^7$ and $[\text{Xe}] 4f^1$
 2. $[\text{Xe}] 4f^7 6s^2$ and $[\text{Xe}] 4f^2 6s^2$
 3. $[\text{Xe}] 4f^2$ and $[\text{Xe}] 4f^7$
 4. $[\text{Xe}] 4f^4$ and $[\text{Xe}] 4f^9$

Question Type : **MCQ**
Question ID : **4050361954**
Option 1 ID : **4050367023**
Option 2 ID : **4050367021**
Option 3 ID : **4050367022**
Option 4 ID : **4050367024**
Status : **Answered**
Chosen Option : **1**

Q.10 B has a smaller first ionization enthalpy than Be. Consider the following statements :

- (I) it is easier to remove 2p electron than 2s electron
- (II) 2p electron of B is more shielded from the nucleus by the inner core of electrons than the 2s electrons of Be
- (III) 2s electron has more penetration power than 2p electron
- (IV) atomic radius of B is more than Be (atomic number B = 5, Be = 4)

The correct statements are :

- Options**
- 1. (I), (II) and (III)
 - 2. (II), (III) and (IV)
 - 3. (I), (III) and (IV)
 - 4. (I), (II) and (IV)

Question Type : **MCQ**

Question ID : **4050361950**

Option 1 ID : **4050367005**

Option 2 ID : **4050367007**

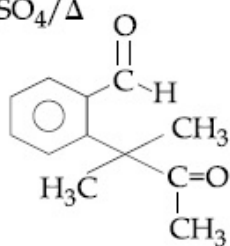
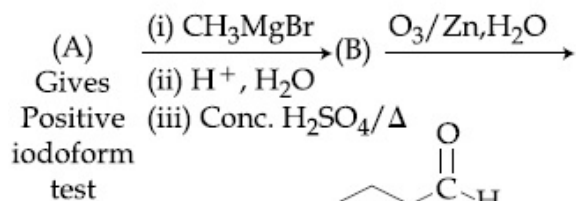
Option 3 ID : **4050367008**

Option 4 ID : **4050367006**

Status : **Answered**

Chosen Option : **1**

Q.11 Identify (A) in the following reaction sequence :



Options

- 1.
- 2.
- 3.
- 4.

Question Type : MCQ

Question ID : 4050361963

Option 1 ID : 4050367058

Option 2 ID : 4050367057

Option 3 ID : 4050367059

Option 4 ID : 4050367060

Status : Answered

Chosen Option : 4

Q.12 The acidic, basic and amphoteric oxides, respectively, are :

- Options**
1. Cl_2O , CaO , P_4O_{10}
 2. N_2O_3 , Li_2O , Al_2O_3
 3. Na_2O , SO_3 , Al_2O_3
 4. MgO , Cl_2O , Al_2O_3

Question Type : **MCQ**

Question ID : **4050361952**

Option 1 ID : **4050367015**

Option 2 ID : **4050367014**

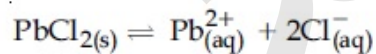
Option 3 ID : **4050367016**

Option 4 ID : **4050367013**

Status : **Answered**

Chosen Option : **2**

Q.13 The K_{sp} for the following dissociation is 1.6×10^{-5}



Which of the following choices is correct for a mixture of 300 mL 0.134 M $\text{Pb}(\text{NO}_3)_2$ and 100 mL 0.4 M NaCl ?

- Options**
1. $Q < K_{sp}$
 2. $Q > K_{sp}$
 3. $Q = K_{sp}$
 4. Not enough data provided

Question Type : **MCQ**

Question ID : **4050361948**

Option 1 ID : **4050367000**

Option 2 ID : **4050366997**

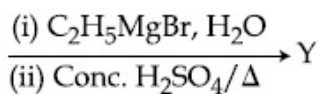
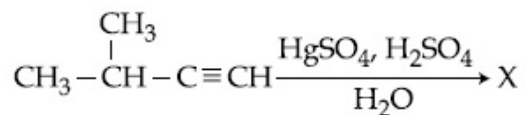
Option 3 ID : **4050366998**

Option 4 ID : **4050366999**

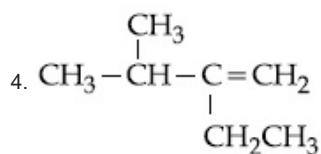
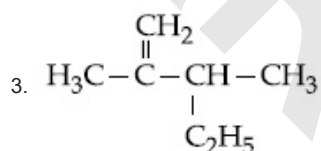
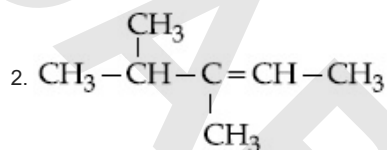
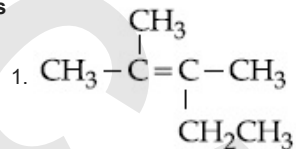
Status : **Not Answered**

Chosen Option : **--**

Q.14 The major product (Y) in the following reactions is :



Options



Question Type : MCQ

Question ID : 4050361961

Option 1 ID : 4050367049

Option 2 ID : 4050367051

Option 3 ID : 4050367052

Option 4 ID : 4050367050

Status : Answered

Chosen Option : 1

Q.15 A chemist has 4 samples of artificial sweetener A, B, C and D. To identify these samples, he performed certain experiments and noted the following observations :

- (i) A and D both form blue-violet colour with ninhydrin.
- (ii) Lassaigne extract of C gives positive AgNO_3 test and negative $\text{Fe}_4[\text{Fe}(\text{CN})_6]_3$ test.
- (iii) Lassaigne extract of B and D gives positive sodium nitroprusside test.

Based on these observations which option is correct ?

Options

1. A : Alitame; B : Saccharin;
C : Aspartame; D : Sucralose
2. A : Saccharin; B : Alitame;
C : Sucralose; D : Aspartame
3. A : Aspartame; B : Alitame;
C : Saccharin; D : Sucralose
4. A : Aspartame; B : Saccharin;
C : Sucralose; D : Alitame

Question Type : **MCQ**

Question ID : **4050361959**

Option 1 ID : **4050367041**

Option 2 ID : **4050367044**

Option 3 ID : **4050367043**

Option 4 ID : **4050367042**

Status : **Not Answered**

Chosen Option : --

Q.16 The compound that cannot act both as oxidising and reducing agent is :

Options

1. H_2SO_3
2. H_3PO_4
3. HNO_2
4. H_2O_2

Question Type : **MCQ**

Question ID : **4050361953**

Option 1 ID : **4050367019**

Option 2 ID : **4050367020**

Option 3 ID : **4050367017**

Option 4 ID : **4050367018**

Status : **Answered**

Chosen Option : **2**

Q.17 If enthalpy of atomisation for $\text{Br}_{2(l)}$ is x kJ/mol and bond enthalpy for Br_2 is y kJ/mol, the relation between them :

- Options**
1. is $x < y$
 2. does not exist
 3. is $x > y$
 4. is $x = y$

Question Type : **MCQ**

Question ID : **4050361946**

Option 1 ID : **4050366991**

Option 2 ID : **4050366992**

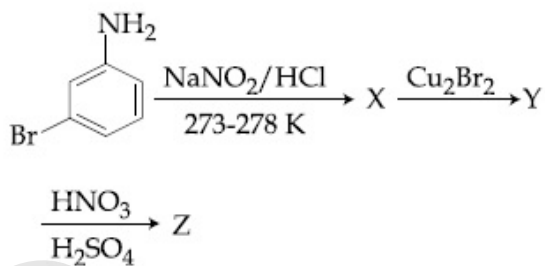
Option 3 ID : **4050366990**

Option 4 ID : **4050366989**

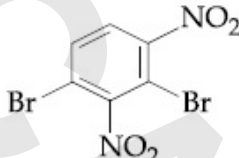
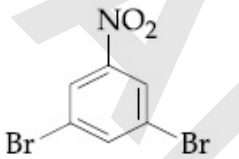
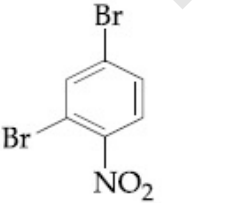
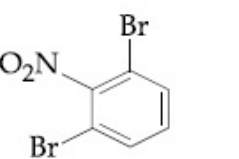
Status : **Marked For Review**

Chosen Option : **4**

Q.18 The major product Z obtained in the following reaction scheme is :



Options

1. 
2. 
3. 
4. 

Question Type : MCQ

Question ID : 4050361960

Option 1 ID : 4050367048

Option 2 ID : 4050367047

Option 3 ID : 4050367045

Option 4 ID : 4050367046

Status : Marked For Review

Chosen Option : 2

Q.19 $[\text{Pd}(\text{F})(\text{Cl})(\text{Br})(\text{I})]^{2-}$ has n number of geometrical isomers. Then, the spin-only magnetic moment and crystal field stabilisation energy [CFSE] of $[\text{Fe}(\text{CN})_6]^{n-6}$, respectively, are :

[Note : Ignore the pairing energy]

- Options
1. 1.73 BM and $-2.0 \Delta_0$
 2. 2.84 BM and $-1.6 \Delta_0$
 3. 0 BM and $-2.4 \Delta_0$
 4. 5.92 BM and 0

Question Type : MCQ

Question ID : 4050361956

Option 1 ID : 4050367030

Option 2 ID : 4050367031

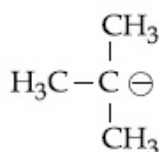
Option 3 ID : 4050367029

Option 4 ID : 4050367032

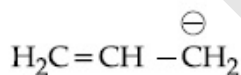
Status : Not Answered

Chosen Option : --

Q.20 The increasing order of basicity for the following intermediates is (from weak to strong)



(i)



(ii)



(iii)



(iv)



(v)

- Options
1. (v) < (iii) < (ii) < (iv) < (i)
 2. (iii) < (i) < (ii) < (iv) < (v)
 3. (v) < (i) < (iv) < (ii) < (iii)
 4. (iii) < (iv) < (ii) < (i) < (v)

Question Type : MCQ

Question ID : 4050361958

Option 1 ID : 4050367038

Option 2 ID : 4050367039

Option 3 ID : 4050367037

Option 4 ID : 4050367040

Status : Answered

Chosen Option : 1

Q.21 The hardness of a water sample containing 10^{-3} M MgSO_4 expressed as CaCO_3 equivalents (in ppm) is _____.
(molar mass of MgSO_4 is 120.37 g/mol)

Given --
Answer :

Question Type : SA
Question ID : 4050361967
Status : Not Answered

Q.22 The molarity of HNO_3 in a sample which has density 1.4 g/mL and mass percentage of 63% is _____. (Molecular Weight of $\text{HNO}_3 = 63$)

Given 14
Answer :

Question Type : SA
Question ID : 4050361964
Status : Answered

Q.23 108 g of silver (molar mass 108 g mol^{-1}) is deposited at cathode from $\text{AgNO}_3(\text{aq})$ solution by a certain quantity of electricity. The volume (in L) of oxygen gas produced at 273 K and 1 bar pressure from water by the same quantity of electricity is _____.

Given 11.35
Answer :

Question Type : SA
Question ID : 4050361966
Status : Answered

Q.24 The mass percentage of nitrogen in histamine is _____.

Given --
Answer :

Question Type : SA
Question ID : 4050361968
Status : Not Answered

Q.25 How much amount of NaCl should be added to 600 g of water ($\rho = 1.00 \text{ g/mL}$) to decrease the freezing point of water to -0.2°C ? _____ . (The freezing point depression constant for water = 2 K kg mol^{-1})

Given --
Answer :

Question Type : SA
Question ID : 4050361965
Status : Not Answered

Section : Mathematics

Q.1 Let C be the centroid of the triangle with vertices $(3, -1)$, $(1, 3)$ and $(2, 4)$. Let P be the point of intersection of the lines $x + 3y - 1 = 0$ and $3x - y + 1 = 0$. Then the line passing through the points C and P also passes through the point :

- Options
1. $(-9, -7)$
 2. $(-9, -6)$
 3. $(7, 6)$
 4. $(9, 7)$

Question Type : MCQ
Question ID : 4050361982
Option 1 ID : 4050367119
Option 2 ID : 4050367121
Option 3 ID : 4050367118
Option 4 ID : 4050367120
Status : Answered
Chosen Option : 2

Q.2 The product

$$2^{\frac{1}{4}} \cdot 4^{\frac{1}{16}} \cdot 8^{\frac{1}{48}} \cdot 16^{\frac{1}{128}} \cdot \dots \text{ to } \infty$$

is equal to :

- Options
1. $2^{\frac{1}{4}}$
 2. 2
 3. $2^{\frac{1}{2}}$
 4. 1

Question Type : MCQ

Question ID : 4050361975

Option 1 ID : 4050367093

Option 2 ID : 4050367092

Option 3 ID : 4050367091

Option 4 ID : 4050367090

Status : Answered

Chosen Option : 3

Q.3 A spherical iron ball of 10 cm radius is coated with a layer of ice of uniform thickness that melts at a rate of $50 \text{ cm}^3/\text{min}$. When the thickness of ice is 5 cm, then the rate (in cm/min.) at which of the thickness of ice decreases, is :

- Options
1. $\frac{5}{6\pi}$
 2. $\frac{1}{54\pi}$
 3. $\frac{1}{36\pi}$
 4. $\frac{1}{18\pi}$

Question Type : MCQ

Question ID : 4050361977

Option 1 ID : 4050367099

Option 2 ID : 4050367101

Option 3 ID : 4050367098

Option 4 ID : 4050367100

Status : Not Answered

Chosen Option : --

Q.4 Let f be any function continuous on $[a, b]$ and twice differentiable on (a, b) . If for all $x \in (a, b)$, $f'(x) > 0$ and $f''(x) < 0$, then for any $c \in (a, b)$, $\frac{f(c) - f(a)}{f(b) - f(c)}$ is greater than :

- Options
1. $\frac{b - c}{c - a}$
 2. 1
 3. $\frac{c - a}{b - c}$
 4. $\frac{b + a}{b - a}$

Question Type : **MCQ**

Question ID : **4050361978**

Option 1 ID : **4050367102**

Option 2 ID : **4050367104**

Option 3 ID : **4050367103**

Option 4 ID : **4050367105**

Status : **Answered**

Chosen Option : **3**

Q.5 The value of

$$\cos^3\left(\frac{\pi}{8}\right) \cdot \cos\left(\frac{3\pi}{8}\right) + \sin^3\left(\frac{\pi}{8}\right) \cdot \sin\left(\frac{3\pi}{8}\right)$$

is :

- Options
1. $\frac{1}{4}$
 2. $\frac{1}{2\sqrt{2}}$
 3. $\frac{1}{2}$
 4. $\frac{1}{\sqrt{2}}$

Question Type : **MCQ**

Question ID : **4050361987**

Option 1 ID : **4050367141**

Option 2 ID : **4050367140**

Option 3 ID : **4050367139**

Option 4 ID : **4050367138**

Status : **Answered**

Chosen Option : **2**

Q.6 The number of real roots of the equation,
 $e^{4x} + e^{3x} - 4e^{2x} + e^x + 1 = 0$ is :

- Options**
1. 3
 2. 4
 3. 1
 4. 2

Question Type : **MCQ**

Question ID : **4050361970**

Option 1 ID : **4050367072**

Option 2 ID : **4050367073**

Option 3 ID : **4050367070**

Option 4 ID : **4050367071**

Status : **Answered**

Chosen Option : **3**

Q.7 The value of $\int_0^{2\pi} \frac{x \sin^8 x}{\sin^8 x + \cos^8 x} dx$ is equal

to :

- Options**
1. 2π
 2. 4π
 3. $2\pi^2$
 4. π^2

Question Type : **MCQ**

Question ID : **4050361981**

Option 1 ID : **4050367115**

Option 2 ID : **4050367114**

Option 3 ID : **4050367116**

Option 4 ID : **4050367117**

Status : **Answered**

Chosen Option : **3**

Q.8 If for some α and β in \mathbb{R} , the intersection of the following three planes

$$x + 4y - 2z = 1$$

$$x + 7y - 5z = \beta$$

$$x + 5y + \alpha z = 5$$

is a line in \mathbb{R}^3 , then $\alpha + \beta$ is equal to :

Options 1. 0

2. 10

3. -10

4. 2

Question Type : **MCQ**

Question ID : **4050361973**

Option 1 ID : **4050367083**

Option 2 ID : **4050367085**

Option 3 ID : **4050367082**

Option 4 ID : **4050367084**

Status : **Not Answered**

Chosen Option : --

Q.9 If e_1 and e_2 are the eccentricities of the

ellipse, $\frac{x^2}{18} + \frac{y^2}{4} = 1$ and the hyperbola,

$\frac{x^2}{9} - \frac{y^2}{4} = 1$ respectively and (e_1, e_2) is a

point on the ellipse, $15x^2 + 3y^2 = k$, then k is equal to :

Options 1. 14

2. 15

3. 17

4. 16

Question Type : **MCQ**

Question ID : **4050361984**

Option 1 ID : **4050367129**

Option 2 ID : **4050367128**

Option 3 ID : **4050367126**

Option 4 ID : **4050367127**

Status : **Answered**

Chosen Option : 4

Q.10

$$\text{If } f(x) = \begin{cases} \frac{\sin(a+2)x + \sin x}{x} & ; x < 0 \\ b & ; x = 0 \\ \frac{(x+3x^2)^{1/3} - x^{1/3}}{x^{4/3}} & ; x > 0 \end{cases}$$

is continuous at $x=0$, then $a+2b$ is equal to :

- Options
1. -2
 2. 1
 3. 0
 4. -1

Question Type : MCQ

Question ID : 4050361976

Option 1 ID : 4050367097

Option 2 ID : 4050367096

Option 3 ID : 4050367095

Option 4 ID : 4050367094

Status : Answered

Chosen Option : 3

Q.11

If the matrices $A = \begin{bmatrix} 1 & 1 & 2 \\ 1 & 3 & 4 \\ 1 & -1 & 3 \end{bmatrix}$, $B = \text{adj } A$

and $C=3A$, then $\frac{|\text{adj } B|}{|C|}$ is equal to :

- Options
1. 16
 2. 2
 3. 8
 4. 72

Question Type : MCQ

Question ID : 4050361972

Option 1 ID : 4050367080

Option 2 ID : 4050367078

Option 3 ID : 4050367079

Option 4 ID : 4050367081

Status : Answered

Chosen Option : 3

Q.12 A circle touches the y -axis at the point $(0, 4)$ and passes through the point $(2, 0)$. Which of the following lines is not a tangent to this circle ?

- Options**
1. $4x - 3y + 17 = 0$
 2. $3x + 4y - 6 = 0$
 3. $4x + 3y - 8 = 0$
 4. $3x - 4y - 24 = 0$

Question Type : **MCQ**

Question ID : **4050361983**

Option 1 ID : **4050367125**

Option 2 ID : **4050367123**

Option 3 ID : **4050367124**

Option 4 ID : **4050367122**

Status : **Answered**

Chosen Option : **3**

Q.13 Let z be a complex number such that

$$\left| \frac{z - i}{z + 2i} \right| = 1$$

and $|z| = \frac{5}{2}$. Then the value of $|z + 3i|$ is :

- Options**
1. $\sqrt{10}$
 2. $\frac{7}{2}$
 3. $\frac{15}{4}$
 4. $2\sqrt{3}$

Question Type : **MCQ**

Question ID : **4050361971**

Option 1 ID : **4050367077**

Option 2 ID : **4050367076**

Option 3 ID : **4050367074**

Option 4 ID : **4050367075**

Status : **Answered**

Chosen Option : **2**

Q.14

$$\text{If } f'(x) = \tan^{-1}(\sec x + \tan x), \quad -\frac{\pi}{2} < x < \frac{\pi}{2},$$

and $f(0) = 0$, then $f(1)$ is equal to :

Options

1. $\frac{\pi + 1}{4}$

2. $\frac{\pi + 2}{4}$

3. $\frac{1}{4}$

4. $\frac{\pi - 1}{4}$

Question Type : MCQ

Question ID : 4050361979

Option 1 ID : 4050367108

Option 2 ID : 4050367107

Option 3 ID : 4050367109

Option 4 ID : 4050367106

Status : Not Answered

Chosen Option : --

Q.15

Negation of the statement :

' $\sqrt{5}$ is an integer or 5 is irrational' is :

Options

1. $\sqrt{5}$ is irrational or 5 is an integer.2. $\sqrt{5}$ is not an integer or 5 is not irrational.3. $\sqrt{5}$ is an integer and 5 is irrational.4. $\sqrt{5}$ is not an integer and 5 is not irrational.

Question Type : MCQ

Question ID : 4050361988

Option 1 ID : 4050367142

Option 2 ID : 4050367143

Option 3 ID : 4050367145

Option 4 ID : 4050367144

Status : Answered

Chosen Option : 4

Q.16 If for all real triplets (a, b, c),

$f(x) = a + bx + cx^2$; then $\int_0^1 f(x) dx$ is equal

to :

Options

1. $2 \left\{ 3f(1) + 2f\left(\frac{1}{2}\right) \right\}$

2. $\frac{1}{3} \left\{ f(0) + f\left(\frac{1}{2}\right) \right\}$

3. $\frac{1}{2} \left\{ f(1) + 3f\left(\frac{1}{2}\right) \right\}$

4. $\frac{1}{6} \left\{ f(0) + f(1) + 4f\left(\frac{1}{2}\right) \right\}$

Question Type : **MCQ**

Question ID : **4050361969**

Option 1 ID : **4050367068**

Option 2 ID : **4050367066**

Option 3 ID : **4050367067**

Option 4 ID : **4050367069**

Status : **Answered**

Chosen Option : **4**

Q.17 If the number of five digit numbers with distinct digits and 2 at the 10th place is 336 k, then k is equal to :

Options

1. 8

2. 7

3. 4

4. 6

Question Type : **MCQ**

Question ID : **4050361974**

Option 1 ID : **4050367086**

Option 2 ID : **4050367087**

Option 3 ID : **4050367089**

Option 4 ID : **4050367088**

Status : **Answered**

Chosen Option : **1**

Q.18 Let the observations $x_i (1 \leq i \leq 10)$ satisfy

the equations, $\sum_{i=1}^{10} (x_i - 5) = 10$ and

$\sum_{i=1}^{10} (x_i - 5)^2 = 40$. If μ and λ are the mean

and the variance of the observations, $x_1 - 3, x_2 - 3, \dots, x_{10} - 3$, then the ordered pair (μ, λ) is equal to :

- Options
1. (6, 3)
 2. (3, 6)
 3. (3, 3)
 4. (6, 6)

Question Type : MCQ

Question ID : 4050361986

Option 1 ID : 4050367136

Option 2 ID : 4050367135

Option 3 ID : 4050367137

Option 4 ID : 4050367134

Status : Answered

Chosen Option : 2

Q.19

The integral $\int \frac{dx}{(x+4)^{8/7} (x-3)^{6/7}}$ is equal

to :

(where C is a constant of integration)

- Options
1. $-\left(\frac{x-3}{x+4}\right)^{-1/7} + C$
 2. $\frac{1}{2} \left(\frac{x-3}{x+4}\right)^{3/7} + C$
 3. $\left(\frac{x-3}{x+4}\right)^{1/7} + C$
 4. $-\frac{1}{13} \left(\frac{x-3}{x+4}\right)^{-13/7} + C$

Question Type : MCQ

Question ID : 4050361980

Option 1 ID : 4050367112

Option 2 ID : 4050367110

Option 3 ID : 4050367111

Option 4 ID : 4050367113

Status : Answered

Chosen Option : 3

Q.20 In a box, there are 20 cards, out of which 10 are labelled as A and the remaining 10 are labelled as B. Cards are drawn at random, one after the other and with replacement, till a second A-card is obtained. The probability that the second A-card appears before the third B-card is :

Options

1. $\frac{15}{16}$
2. $\frac{9}{16}$
3. $\frac{13}{16}$
4. $\frac{11}{16}$

Question Type : **MCQ**

Question ID : **4050361985**

Option 1 ID : **4050367130**

Option 2 ID : **4050367133**

Option 3 ID : **4050367131**

Option 4 ID : **4050367132**

Status : **Not Answered**

Chosen Option : --

Q.21

If the vectors, $\vec{p} = (a + 1)\hat{i} + a\hat{j} + a\hat{k}$,

$\vec{q} = a\hat{i} + (a + 1)\hat{j} + a\hat{k}$ and

$\vec{r} = a\hat{i} + a\hat{j} + (a + 1)\hat{k}$ ($a \in \mathbf{R}$) are

coplanar and $3(\vec{p} \cdot \vec{q})^2 - \lambda |\vec{r} \times \vec{q}|^2 = 0$,

then the value of λ is _____.

Given 3

Answer :

Question Type : **SA**

Question ID : **4050361991**

Status : **Answered**

Q.22 The projection of the line segment joining the points $(1, -1, 3)$ and $(2, -4, 11)$ on the line joining the points $(-1, 2, 3)$ and $(3, -2, 10)$ is _____.

Given 4.44

Answer :

Question Type : SA

Question ID : 4050361993

Status : Answered

Q.23 The number of distinct solutions of the equation, $\log_{\frac{1}{2}}|\sin x| = 2 - \log_{\frac{1}{2}}|\cos x|$ in the interval $[0, 2\pi]$, is _____.

Given 2

Answer :

Question Type : SA

Question ID : 4050361990

Status : Answered

Q.24 If for $x \geq 0$, $y = y(x)$ is the solution of the differential equation, $(x + 1)dy = ((x + 1)^2 + y - 3)dx$, $y(2) = 0$, then $y(3)$ is equal to _____.

Given 2.17

Answer :

Question Type : SA

Question ID : 4050361992

Status : Marked For Review

Q.25 The coefficient of x^4 in the expansion of $(1 + x + x^2)^{10}$ is _____.

Given 615

Answer :

Question Type : SA

Question ID : 4050361989

Status : Answered